

Fabric Structures: A Close Look




Handout



Fashion
through science

Draw what you see

Draw what you see under the lens for each fabric. Label one non-woven, one woven, and one knit.



Which fabric structure looks like loops? _____

Which fabric structure looks different front and back? _____

Which fabric structure looks different vertically and horizontally? _____

Which fabric structure has interlacing yarns at right angles? _____

Which fabric structure looks the same in any direction? _____

Which fabric structure is made of interlaced individual fibers instead of yarns? _____

